

Analyse de séquence : une dernière fête (1 h 22 min 45 sec)



1



2



3



4



5



6




7



8



9



10



11



12



13



14



15




16



17




18



19



20



21



22




23



24



25



26



27



28



29



30